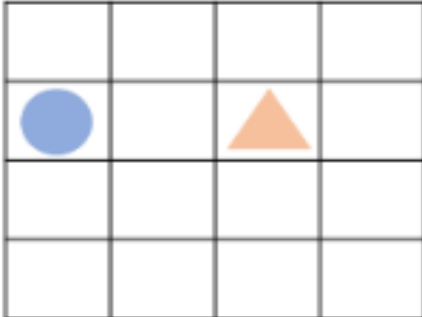


# MATHS – YEAR 2 HOMEWORK

## Describing Movement

1a. Jose thinks the circle is two squares to the right of the triangle.



Is he correct? Explain how you know.



R

## Describing Movement

1b. Rhea thinks the star is three squares up from the circle.

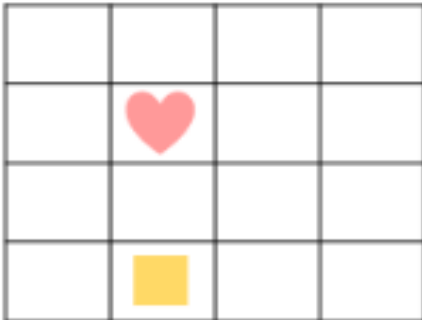


Is she correct? Explain how you know.



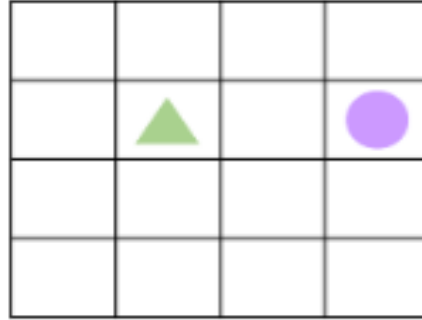
R

2a. Write a statement using up, down, left or right to describe how the heart can get to the square.



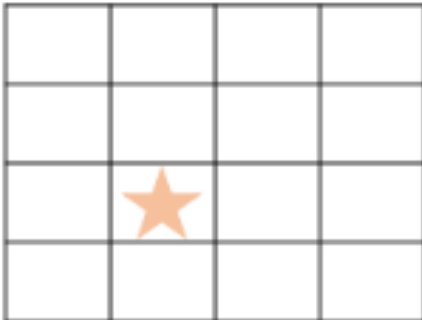
PS

2b. Write a statement using up, down, left or right to describe how the circle can get to the triangle.



PS

3a. The treasure is buried 2 squares right of the star.

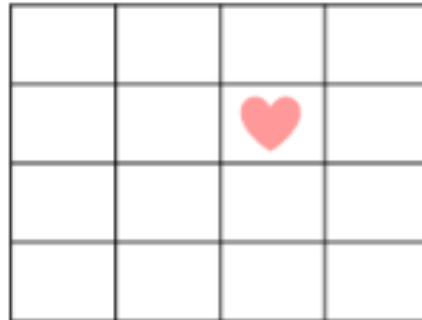


Where is the treasure buried?



PS

3b. The treasure is buried 2 squares left of the heart.



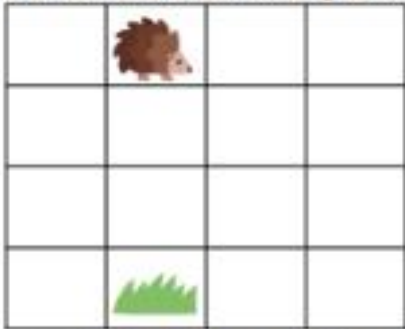
Where is the treasure buried?



PS

## Describing Movement

4a. Cai thinks that if the hedgehog moves 3 squares down, it will find the grass.

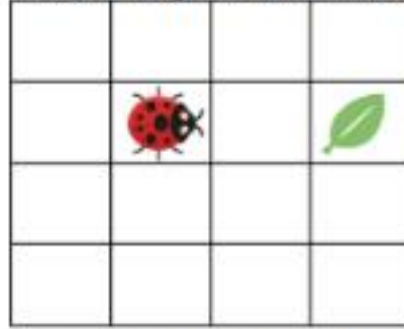


Is he correct? Explain how you know.



## Describing Movement


4b. Genie thinks that if the ladybird moves 2 squares right, it will find the leaf.




Is she correct? Explain how you know.



5a. Write statements using forwards, backwards, left and right to describe how each creature can get to the leaves.



5b. Write statements using forwards, backwards, left and right to describe how each creature can get to the grass.




6a. The treasure is buried 2 squares left of the ship.



Where is the treasure buried?



6b. The treasure is buried 3 squares right of the ship.

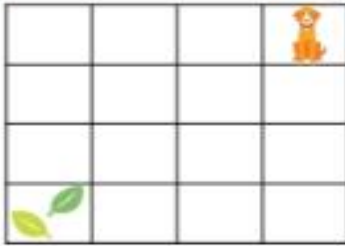


Where is the treasure buried?



### Describing Movement

7a. Joy thinks if the dog moves 2 squares down and 3 squares left, it will find the leaves.




Is she correct? Explain how you know.



PS

### Describing Movement

7b. Paulo thinks that if the hedgehog moves 2 squares right and 3 squares down, it will find the grass.

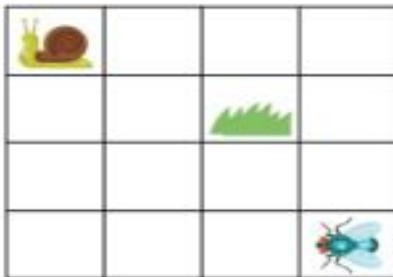


Is he correct? Explain how you know.




PS

8a. Write statements using forwards, backwards, left and right to describe how each creature can get to the grass.



PS

8b. Write statements using forwards, backwards, left and right to describe how each creature can get to the leaves.



PS

9a. The treasure is buried 1 square forward and 2 squares right of the ship.



Where is the treasure buried?



PS

9b. The treasure is buried 3 squares right and 2 squares forward from the ship.



Where is the treasure buried?



PS