













Year 2 Homework

Telling the Time

Write down the time each clock is showing on the line underneath.

 _____	 _____	 _____
 _____	 _____	 _____
 _____	 _____	 _____
 _____	 _____	 _____

Challenge



At _____ o'clock, Peter Rabbit woke up.



At _____ o'clock, Peter Rabbit ate 2 carrots for breakfast.



At _____ o'clock, Peter Rabbit went out to find his friend, Benjamin Bunny.



At _____ o'clock, Peter Rabbit and his friends went into Mr. McGregor's garden.



At _____ o'clock, Peter Rabbit had some tasty carrots in Mr. McGregor's garden.



Draw the hands on the clock to show that Peter Rabbit was chased by Mr. McGregor at 1 o'clock.



Draw the hands on the clock to show that Peter Rabbit escaped at 3 o'clock.



Draw the hands on the clock to show that Peter Rabbit ate some strawberries at 5 o'clock.