


Year 1 Homework

Introducing Fractions of Amounts


# Finding Quarter

Find a quarter of these amounts. Use counters or buttons to help, or draw circles around the pictures to find the answer. The first one has been done for you.


sweets      Quarter of  is        $\frac{1}{4}$  of  =




kites      Quarter of  is        $\frac{1}{4}$  of  =




cats      Quarter of  is        $\frac{1}{4}$  of  =



flowers      Quarter of  is        $\frac{1}{4}$  of  =



trees      Quarter of  is        $\frac{1}{4}$  of  =



stars      Quarter of  is        $\frac{1}{4}$  of  =



### Challenge

## Introducing Fractions of Amounts

# Finding Quarter

Draw 8 stars then find a quarter.

Draw 12 flowers then find a quarter.

$$\frac{1}{4} \text{ of } 8 = \square$$

$$\frac{1}{4} \text{ of } 12 = \square$$

Complete these number sentences.

Quarter of **4** is

$$\frac{1}{4} \text{ of } 28 = \square$$

Quarter of **36** is

$$\frac{1}{4} \text{ of } 20 = \square$$

Quarter of **24** is

$$\frac{1}{4} \text{ of } 32 = \square$$

Write your own number sentence for this picture.

