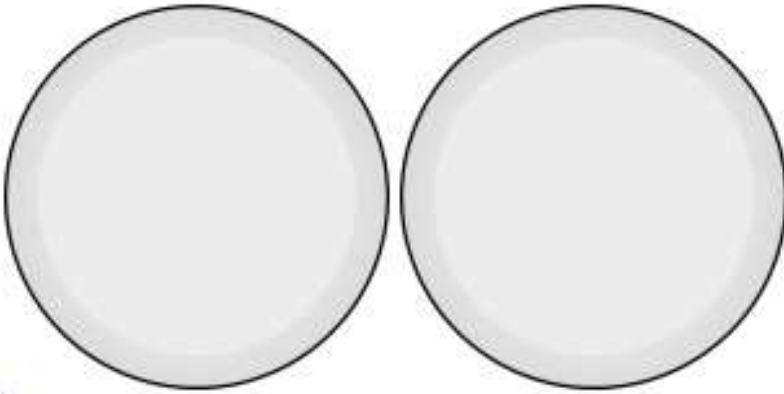


Year 1 Homework


Halving a Quantity

4. Draw half of the cherries on each plate.




VF
HW/Ed

5. Draw the counters in the correct group to match the statement below.



Half of 8 is 4.



VF
HW/Ed

6. Here are half of Shazia's earrings.



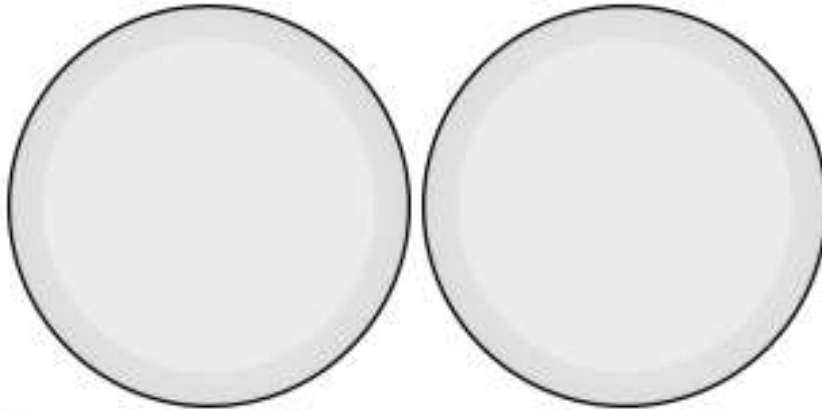
How many earrings does she own? Explain how you know.



RPS
HW/Ed


Halving a Quantity

7. Draw half of the fruit on each plate.




VF
HW/Ed

8. Draw the counters in the correct group to match the statement below.



Half of 16 is 8.



VF
HW/Ed

9. The numbers below show half of each child's age.



What is their total combined age? Explain how you know.



EPS
HW/Ed