





















Counting Up and Down in Tenths

Write these tenths in words and numbers. Use your answers to practise counting up and down in tenths.

Diagram	Words	Numbers
	One Tenth	$\frac{1}{10}$
		
		
		
		
		
		
		
		
	One Whole	1
		
		
		
		
		
		
		
		
		
		

Y3 Task

Just write the fraction in your book. You do not need to print this page.

Converting Fractions to Decimals

Convert the following fractions to decimals.

1. $\frac{1}{2}$ _____

2. $\frac{1}{4}$ _____

3. $\frac{1}{8}$ _____

4. $\frac{1}{5}$ _____

5. $\frac{2}{5}$ _____

6. $\frac{3}{4}$ _____

7. $\frac{1}{10}$ _____

8. $\frac{1}{100}$ _____

9. $\frac{1}{25}$ _____

10. $\frac{1}{50}$ _____

11. $\frac{3}{10}$ _____

12. $\frac{7}{10}$ _____

13. $\frac{4}{5}$ _____

14. $\frac{3}{5}$ _____

15. $\frac{15}{20}$ _____

16. $\frac{6}{8}$ _____

17. $\frac{4}{10}$ _____

18. $\frac{45}{50}$ _____

19. $\frac{28}{50}$ _____

20. $\frac{13}{20}$ _____

Y4 Task

Just write in your homework book. You do not need to print this page.

Y3 and 4 you can play fraction games.

<https://mathsframe.co.uk/en/resources/category/471/Y4-Decimals-and-Fractions>