

Year 2 Maths Homework


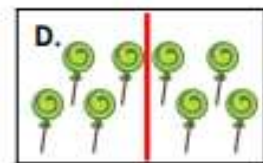
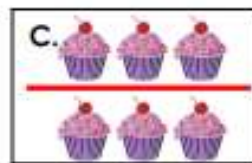

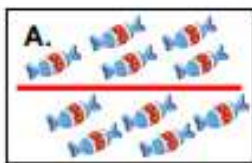
Find a Half

1. Complete the missing numbers.



VF
HW/Est

2. Match the whole number to its half.



VF
HW/Est

3. Polly has £5 to spend. Which of these items can she afford in the half price sale? Explain your answer.

Half Price Sale

~~£10~~
T-shirt

~~£12~~
jacket

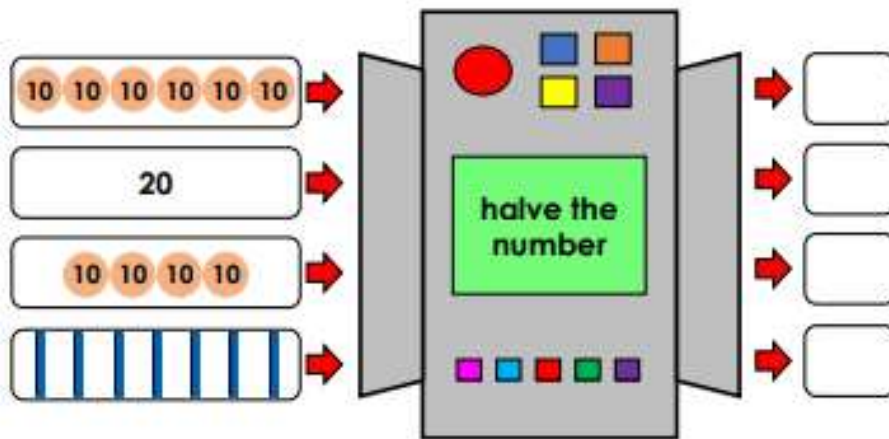
~~£6~~
shorts



RPS
HW/Est

Find a Half

4. Complete the missing numbers.



VF
HW/Ext

5. Match the whole number to its half.

<p>A.</p>	<p>B.</p> <p style="text-align: center; font-size: 24px;">18</p>	<p>C.</p>	<p>D.</p> <p style="text-align: center; font-size: 24px;">10</p>
<p>E.</p> <p style="text-align: center; font-size: 24px;">5</p>	<p>F.</p> <p style="text-align: center; font-size: 24px;">50</p>	<p>G.</p> <p style="text-align: center; font-size: 24px;">9</p>	<p>H.</p> <p style="text-align: center; font-size: 24px;">12</p>



VF
HW/Ext

6. Daisy has £10 to spend. Which of these items can she afford in the half price sale? Explain your answer.

~~£20~~
dress

~~£18~~
jumper

~~£26~~
jacket

Prove it.



EPS
HW/Ext

