


Measure Length 2

4a. Circle the correct length of the key.




4cm 3cm 5cm



VF

Measure Length 2

4b. Circle the correct length of the paintbrush.




6cm 8cm 7cm



VF

5a. Measure the items to complete the sentences.



The pencil is ____ cm.



The paper clip is ____ cm.




VF

5b. Measure the items to complete the sentences.



The pen is ____ cm.



The spring is ____ cm.



VF


6a. Measure the items and compare their height.



cm is greater than cm

VF

6b. Measure the items and compare their height.



cm is less than cm

VF

Challenge

Measure Length 2

Measure Length 2

1a. Kim thinks her pencil case measures 8cm.



Explain the mistake she has made.



R

1b. Anna thinks her purse measures 5cm.



Explain the mistake she has made.



R

2a. Whose crayon is being measured?

My crayon is greater than 6cm long.



Helen



Ben

My crayon is less than 7cm long.



PS

2b. Whose crayon is being measured?

My crayon is less than 6cm long.



Joy




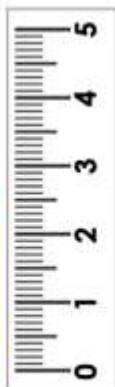
Rob

My crayon is greater than 6cm long.



PS

3a. Raj thinks the chocolate is taller than the juice.





Is he correct? Explain your answer.



R

3b. Sam thinks the jam is taller than the soda.



Is he correct? Explain your answer.



R