

### Recognise Equal Groups

1. Which image is each child describing?



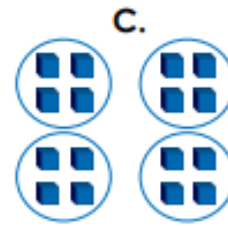
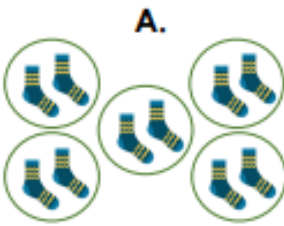
I have 6 equal groups of 1.



I have 4 equal groups of 4.



I have 5 equal groups of 2.



VF  
HW/Ext


2. Complete the sentences for each image.

A.



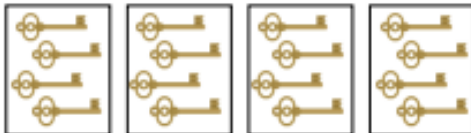
I have \_\_\_\_ equal groups of 2.

B.



I have \_\_\_\_ equal groups of 3.

C.



I have 4 equal groups of \_\_\_\_.



VF  
HW/Ext

3. True or false? Jamie is correct.



My sweets are grouped into 3 jars, but they are not equal groups.



Explain your answer.



RPS  
HW/Ext

## Recognise Equal Groups

4. Which image is each child describing?



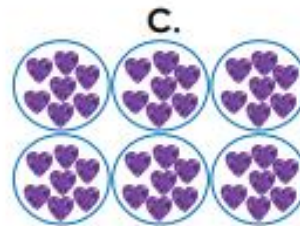
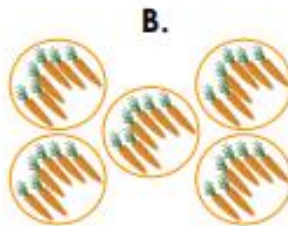
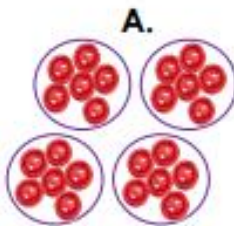
I have 5 equal groups of 6.



I have 4 equal groups of 6.



I have 6 equal groups of 7.

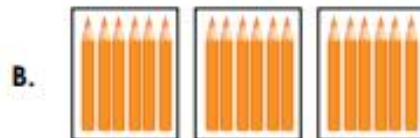


VF  
HW/Ext

5. Complete the sentences for each image.



I have 4 equal groups of \_\_\_\_.



I have \_\_\_\_ equal groups of 6.



I have 4 equal groups of \_\_\_\_.



VF  
HW/Ext

6. True or false? Jamila is correct.



My teddies are grouped into 4 baskets, but they are not equal groups.



Explain your answer.



RPS  
HW/Ext

## Recognise Equal Groups

7. Which image is each child describing?



I have 4 equal groups of 8.



I have 8 equal groups of 2.




I have 5 equal groups of 4.

A.



B.



C.



VF  
HW/Ext

8. Complete the sentences for each image.

A.



I have \_\_\_\_\_ equal groups of 6.

B.



I have \_\_\_\_\_ equal groups of 8.

C.



I have 4 equal groups of \_\_\_\_\_.



VF  
HW/Ext

9. True or false? Heidi is correct.



My money is grouped in to 2 purses, but they are not equal groups.



Explain your answer.



RFS  
HW/Ext