




YEAR 2 MATHS  
HOMEWORK

## Number Bonds to 10

## Number Bonds to 10

7a. Tim collects cards which are worth points.




He wants to collect 10 points.  
Find 2 answers.



1 PS

7b. Beth collects cards which are worth points.



She wants to collect 10 points.  
Find 2 answers.



1 PS

8a. Bet needs 10 boxes.



Is she correct? Explain your answer.



1 R

8b. Ed needs 10 balls.




Is he correct? Explain your answer.



1 PS

9a. Bill had 10p. He dropped some pennies in the mud. How many did he drop?



1 PS

9b. Troy had 10p. He dropped some pennies in the mud. How many did he drop?



1 R