

Year 2 Maths Homework

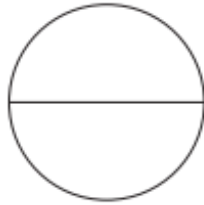
Complete the following questions in your homework book.

Homework needs to be in by WEDNESDAY 19TH JULY 2023.

Year 2 - Read and Colour the Fractions



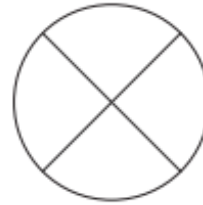
one quarter



one half



three quarters



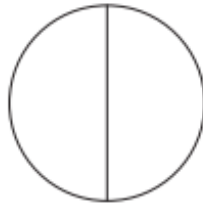
whole



one third



one quarter



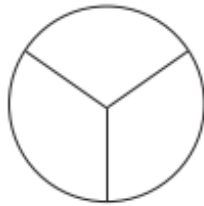
whole



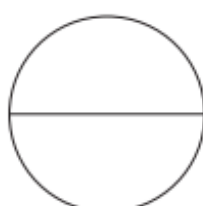
two thirds



whole



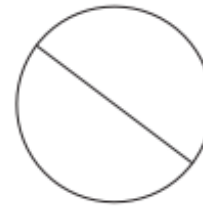
one third



one half



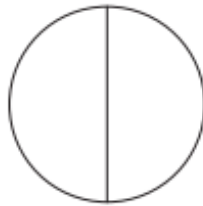
two quarters



$\frac{2}{2}$



$\frac{2}{3}$



$\frac{1}{2}$



$\frac{1}{3}$

Missing Numbers

Fill in the missing numbers, using the diagrams to help you.

Example:

$$\frac{1}{2} \text{ of } \boxed{10} = 5$$



1. $\frac{1}{2}$ of $\boxed{} = 7$



5. $\frac{1}{3}$ of $\boxed{} = 6$



2. $\frac{1}{4}$ of $\boxed{} = 4$



6. $\frac{1}{4}$ of $\boxed{} = 5$



3. $\frac{1}{3}$ of $\boxed{} = 5$



7. $\frac{3}{4}$ of $\boxed{} = 12$



4. $\frac{1}{2}$ of $\boxed{} = 9$



8. $\frac{2}{3}$ of $\boxed{} = 12$

