


03/05/23

Year 5/6 Math Homework

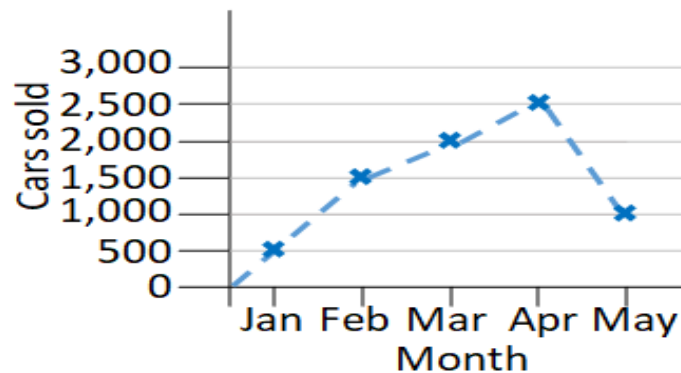


## •Year 5

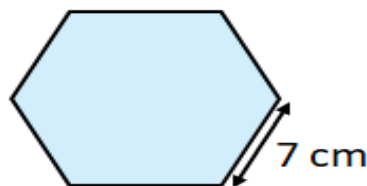
CVI

1) If a full turn is  $360^\circ$ , how many degrees are in half a turn?

2) How many cars were sold in January?



3) Calculate the perimeter of the regular hexagon.



4)  $5,824 + 999 =$

# Year 6- SATs Past Papers can be accessed from this link; [KS2 Year 6 SATs Papers](#)

99% of 200 =

1 mark

$1\frac{1}{2} \times 40 =$

1 mark

28% of 650 =

1 mark

$\frac{1}{4} \div 2 =$

1 mark

$4\frac{2}{3} - 1\frac{6}{7} =$

1 mark

$9^2 - 36 \div 9 =$

1 mark

$97 \overline{) 8827}$

2 marks