

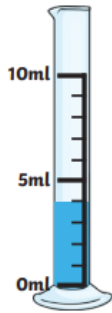
Year 2 – Maths Homework

To help you understand what we have been learning this week I would like you to complete the following questions into your homework book.

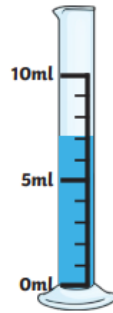
I would also like you to spend some time reading with an adult at home and to write this down in the reading record tracking sheet in the front of your homework book.

Remember homework is due in on **WEDNESDAY 29th MARCH.**

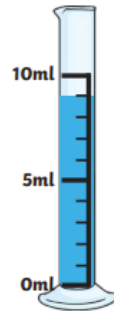
How much water is there in each jug?



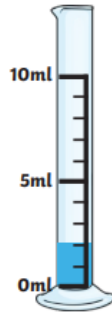
1. _____ ml



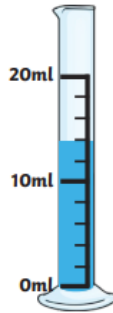
2. _____ ml



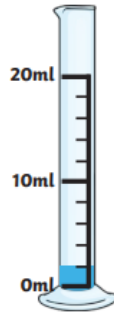
3. _____ ml



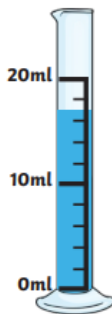
4. _____ ml



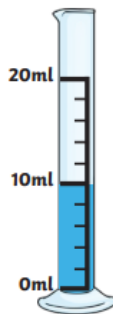
5. _____ ml



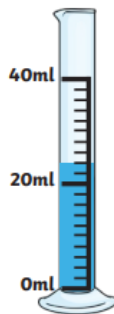
6. _____ ml



7. _____ ml



8. _____ ml



9. _____ ml

Comparing Capacities

ml = millilitres

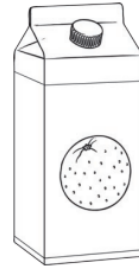
L = litres



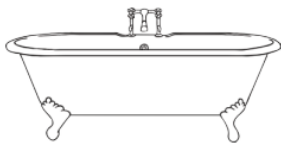
200ml



500ml



1L



100L



300ml




10L

Write the names of the objects in order from largest to smallest capacity.

largest _____
|
|
|
|
|
|
|
|
|
|
smallest _____


The vet has come to weigh the animals at the zoo.



205kg



240kg



500kg




50kg



150kg



125kg



650kg

Fill in the correct sign (<, > or =) to make these number sentences correct:

lion chimp

zebra rhino

tiger lion

hippo rhino

chimp + monkey rhino

chimp + zebra tiger

hippo + zebra rhino