

Year 2 – Maths Homework

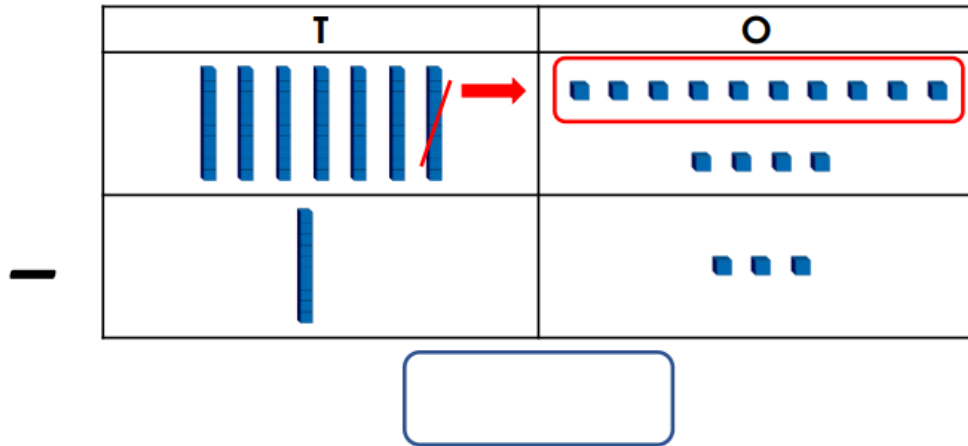
To help you understand what we have been learning this week I would like you to complete the following questions into your homework book.

I would also like you to spend some time reading with an adult at home and to write this down in the reading record tracking sheet in the front of your homework book.

Remember homework is due in on **WEDNESDAY 9th NOVEMBER.**

Subtract with 2 Digits 2

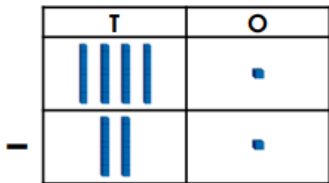
1. Use the chart below to find the difference between 74 and 26 by drawing any missing Base 10 and using it to work out the answer.



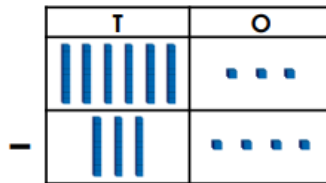
VF
HW/Ext

2. Match the subtractions to the correct answers below.

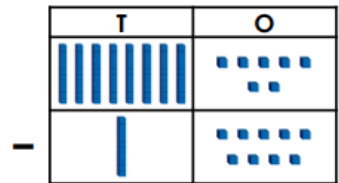
1.



2.



3.



A. 29

B. 20

C. 52

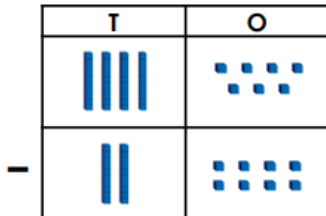
D. 68



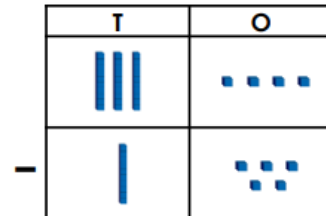
VF
HW/Ext

3. Circle the odd one out from the place value charts shown below.

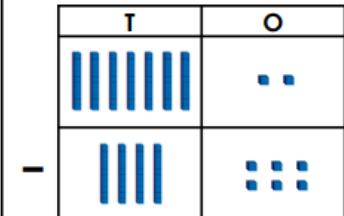
A.



B.



C.



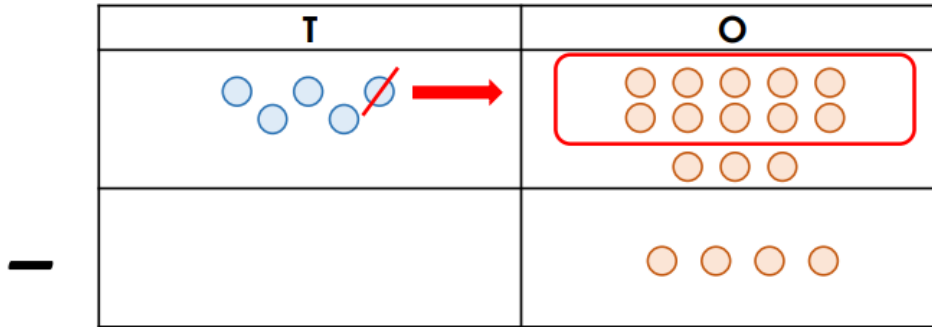
Explain the reason for your choice.



RPS
HW/Ext

Subtract with 2 Digits 2

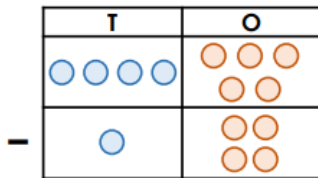
4. Use the chart below to find the difference between 53 and 17 by drawing any missing counters and using them to work out the answer.



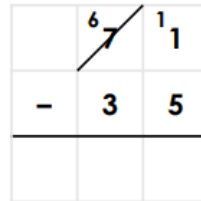
VF
HW/Ext

5. Match the subtractions to the correct answers below.

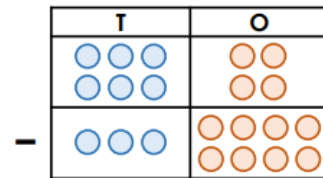
1.



2.



3.



A. 34

B. 36

C. 26

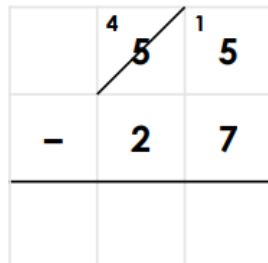
D. 31



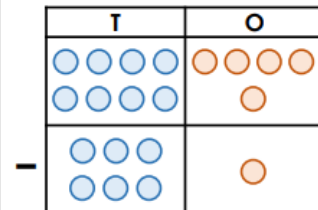
VF
HW/Ext

6. Circle the odd one out from the calculations shown below.

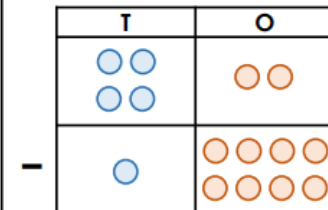
A.



B.



C.



Explain the reason for your choice.



RPS
HW/Ext