

## Year 1 - Maths

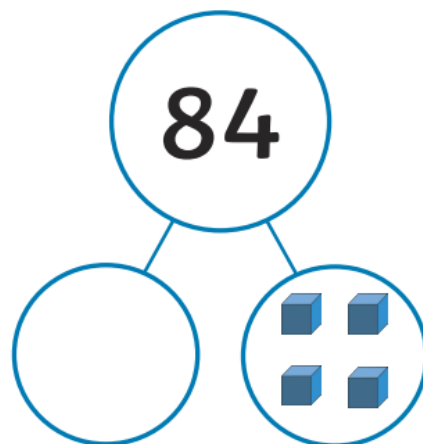
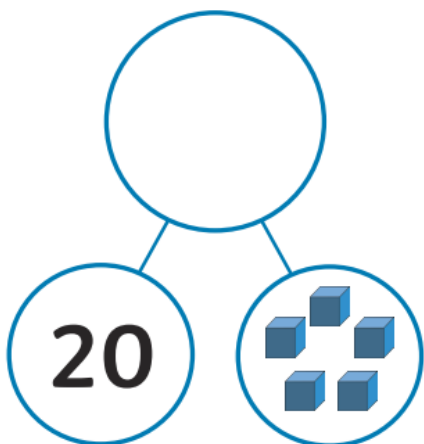
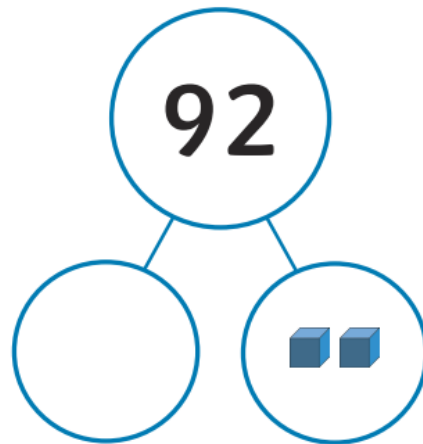
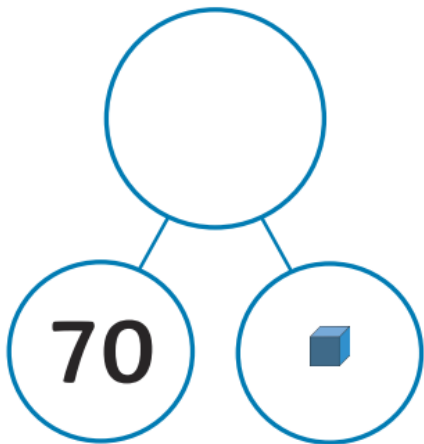
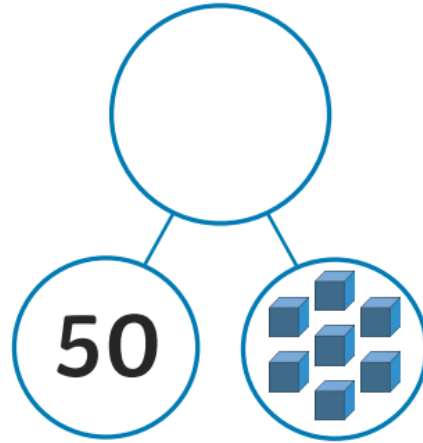
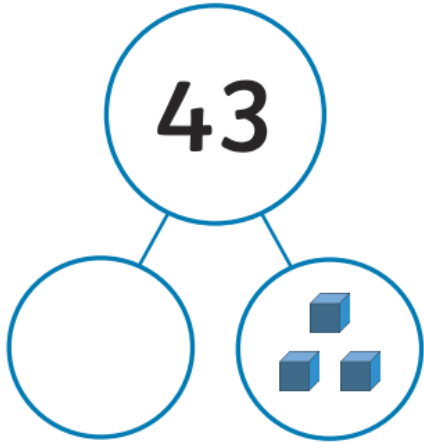
This week we have started to look at counting forward and backwards to 100. Complete the following work in your homework book.

Write the following numbers in words. Be careful with your spelling.

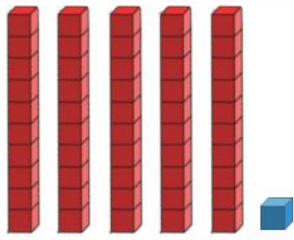
1.	2.	3.	4.	5.
6.	7.	8.	9.	10.
11.	12.	13.	14.	15.
16.	17.	18.	19.	20.
21.	22.	23.	24.	25.
26.	27.	28.	29.	30.
31.	32.	33.	34.	35.
36.	37.	38.	39.	40.
41.	42.	43.	44.	45.
46.	47.	48.	49.	50.

# Tens and Ones

Complete the part-part-whole pictures by adding the missing number.

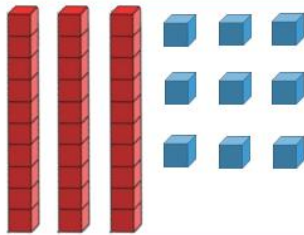


Write how many groups of tens and ones there are.



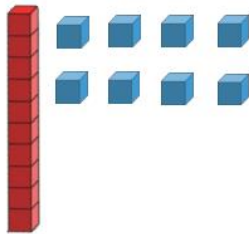
\_\_\_\_\_ tens \_\_\_\_\_ one

\_\_\_\_\_ + \_\_\_\_\_ = \_\_\_\_\_



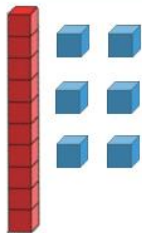
\_\_\_\_\_ tens \_\_\_\_\_ ones

\_\_\_\_\_ + \_\_\_\_\_ = \_\_\_\_\_



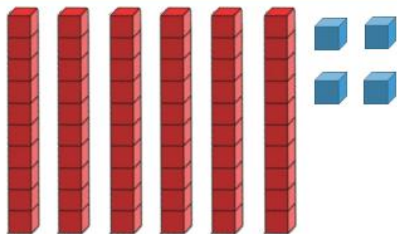
\_\_\_\_\_ ten \_\_\_\_\_ ones

\_\_\_\_\_ + \_\_\_\_\_ = \_\_\_\_\_



\_\_\_\_\_ ten \_\_\_\_\_ ones

\_\_\_\_\_ + \_\_\_\_\_ = \_\_\_\_\_



\_\_\_\_\_ tens \_\_\_\_\_ ones

\_\_\_\_\_ + \_\_\_\_\_ = \_\_\_\_\_