

Reception Homework

Have a go at doing the sums below. You can write or draw them in your books.

How many toes? Count in steps of 5.



How many socks? Count in steps of 2.




Circle the person who is second in the line.




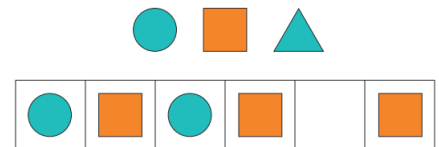
How many carrots?




How many apples?




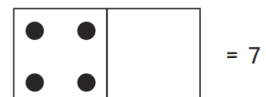
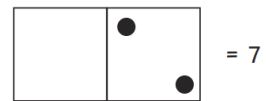
Circle which shape is missing in each pattern.



Circle the two number shapes that make 8 when added together.



Add spots to the dominoes to make 7 altogether.



Circle the cupcakes in groups of 2.



Count the cupcakes in twos to find out how many cupcakes there are.