

Tell the time to 5 minutes

1 Label the clock to show the number of minutes past the hour.

A clock face with numbers 1-12. There are empty boxes around the clock for labeling minutes past the hour. Some boxes are pre-filled with text:

- Box at 12:
- Box at 1:
- Box at 2:
- Box at 3:
- Box at 4:
- Box at 5:
- Box at 6:
- Box at 7:
- Box at 8:
- Box at 9:
- Box at 10:
- Box at 11:

Pre-filled labels:

- Box at 5: 5 minutes
- Box at 7: 35 minutes

2 Label the clock to show what time would be shown if the minute hand was pointing to each interval.

A clock face with numbers 1-12. There are empty boxes around the clock for labeling time intervals. Some boxes are pre-filled with text:


- Box at 12:
- Box at 1:
- Box at 2:
- Box at 3:
- Box at 4:
- Box at 5:
- Box at 6:
- Box at 7:
- Box at 8:
- Box at 9:
- Box at 10:
- Box at 11:

Pre-filled labels:


- Box at 1: 5 minutes past
- Box at 3: quarter past
- Box at 8: 20 minutes to

Is there more than one possible answer for each label?

3 Tiny is telling the time.



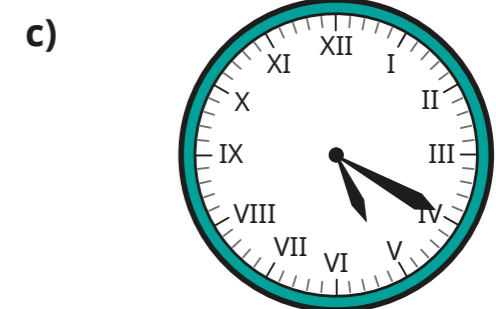

The hour hand is pointing just after 5 and the minute hand is pointing to 2, so the time is 2 minutes past 5



a) What mistake has Tiny made?

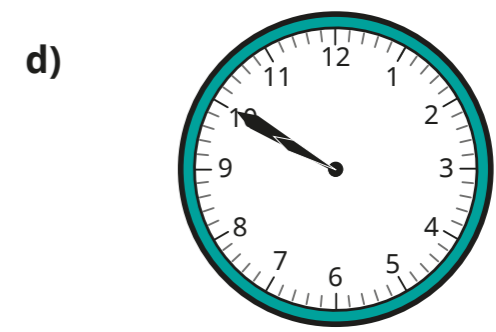
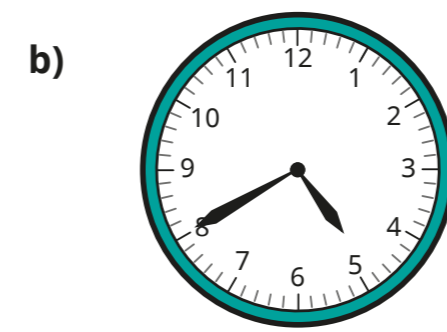
b) What time is it?

4 What time is shown on each clock?



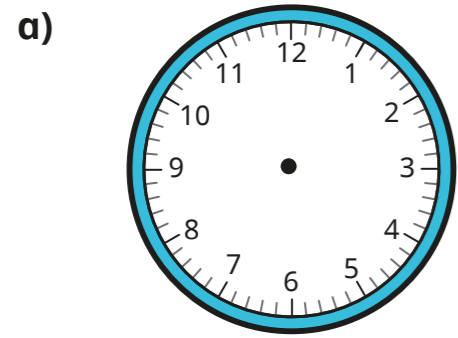
minutes past

minutes past

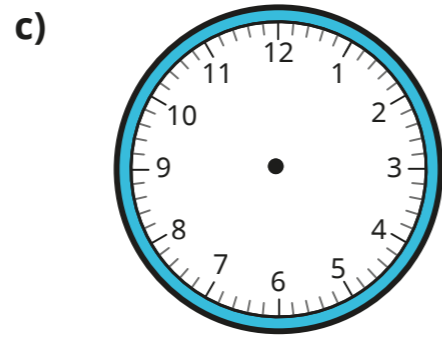


minutes to

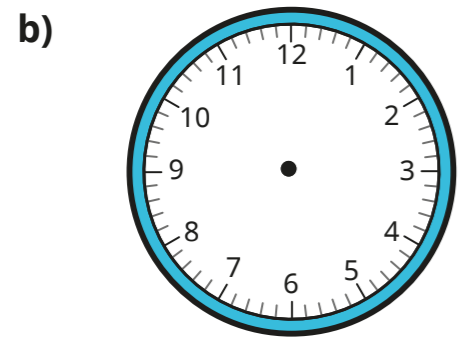
5 Draw the hands on the clocks to show the correct times.



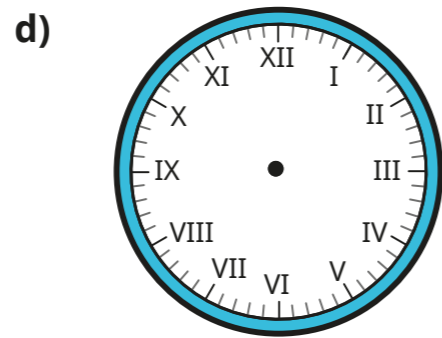
15 minutes past 6



25 minutes to 9

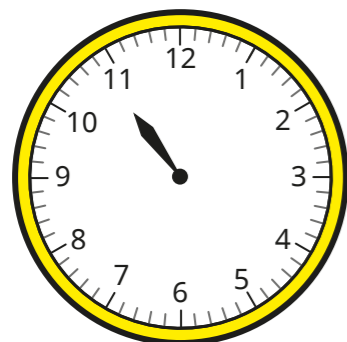


quarter to 9



5 minutes to 12

6 Jack wants to tell the time, but the minute hand has fallen off the clock.



The time must be something to the hour.



Do you agree with Jack? _____

Talk about it with a partner.



7 The minute hand and the hour hand of a clock are both pointing to an even number.

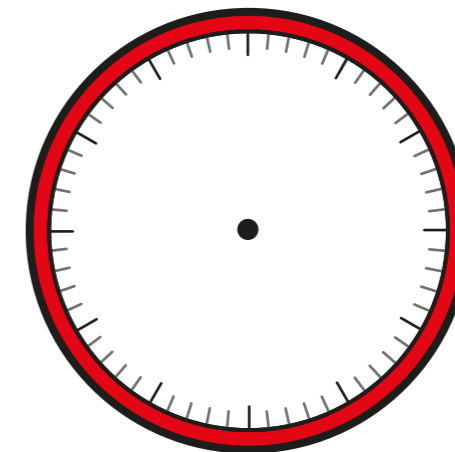
What times could it be?

Give three possible answers.

Compare answers with a partner. Can you find any more?

8 The numbers of the clock face were written in Roman numerals but they have been rubbed off.

The current time has a V in the hour and a V in the minutes.



What time could it be? Draw your answer on the clock.

Are there any other answers?

Talk about it with a partner.

