

Use am and pm


1 Sort the events into the time of day that they might happen.

sunrise	go to school	alarm goes off	after-school club
school play rehearsal	eat breakfast	go home from school	football match
breakfast club	gymnastics practice	lunch	wake up

Morning (am)	Afternoon (pm)


Compare answers with a partner.

2 One of the times is when Dexter starts school.
Which do you think it is?
Tick your answer.



Talk about it with a partner.

3 One of the times is when Rosie goes to bed.
Which do you think it is?
Tick your answer.



Talk about it with a partner.


4 Tick the **earliest** time in each set.

a)	9:13 am	6:18 am	10:11 am	7:59 am
b)	9:13 pm	6:18 pm	10:11 pm	7:59 pm
c)	9:13 am	6:18 pm	10:11 pm	7:59 am
d)	12:13 am	11:18 pm	12:11 pm	7:59 am

5 Tick the **latest** time in each set.

- a) 9:13 am 6:18 am 10:11 am 7:59 am
- b) 9:13 pm 6:18 pm 10:11 pm 7:59 pm
- c) 9:13 am 6:18 pm 10:11 pm 7:59 am
- d) 12:13 am 11:18 pm 12:11 pm 7:59 am

6



12:15 pm is later than 4:00 pm, because 12 is greater than 4

Do you agree with Tiny? _____

Talk about it with a partner.




7 Write the times in order from earliest to latest.

- a) 10:12 am 10:04 pm 7:15 am 12:10 pm
-


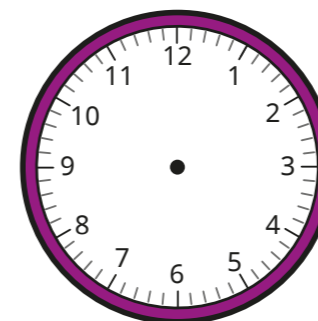
- b) 1:11 am 12:41 pm 6:51 pm 8:19 am
-

8



It is half past 9 in the morning.


Show this time on both clocks.



Compare answers with a partner.

9

Tom gets to the cinema at this time in the evening.



Here are the film times.

9:00 am	12:15 pm	3:00 pm
6:30 pm	7:15 pm	9:00 pm

Which is the earliest showing that Tom can go to? _____

Talk about your answer with a partner.

