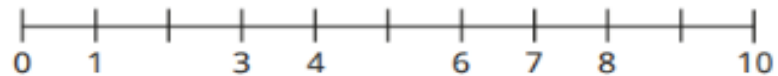


## MATHS – YEAR 1 HOMEWORK

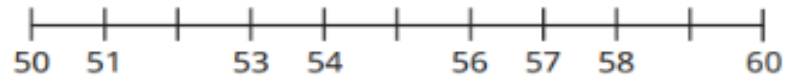
### The number line to 100

1 Complete the number lines.

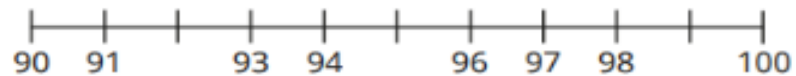
a)



b)



c)

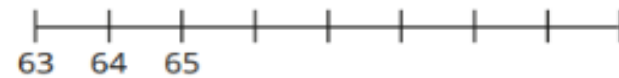


What do you notice?




2 Complete the number lines.

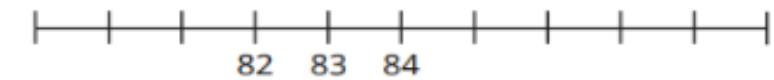
a)



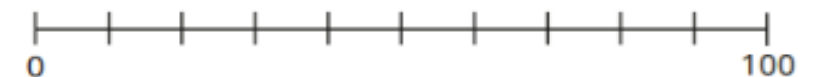
b)



c)



3 Complete the number line.



## The number line to 100

2 Complete the number lines.

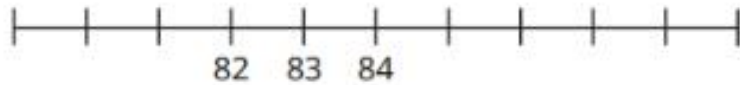
a)



b)



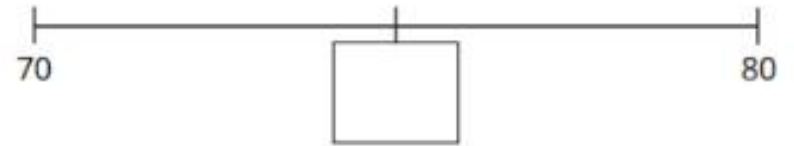
c)



3 Complete the number line.




4 Here is a number line.

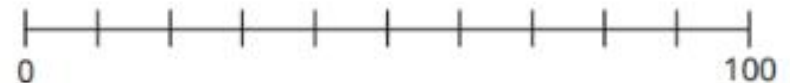



a) What is the missing number?

b) Estimate and label where the numbers belong on the number line.



5 Estimate where the numbers belong on the number line.



### One More One Less

1a. Which statement is incorrect?



One more than 22 is 32.

One more than 22 is 23.




### One More One Less

1b. Which statement is incorrect?



One less than 45 is 43.

One less than 45 is 44.



### One More One Less

4a. Which statement is incorrect?



One more than 44 is 43.

One less than 44 is 43.



### One More One Less

4b. Which statement is incorrect?



One less than 25 is 22.

One more than 25 is 26.



2a. Which is the odd one out?

A.

One more than 37 is 38.

B.



C.



2b. Which is the odd one out?


A.

One less than 16 is 15.

B.

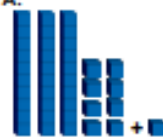


C.



5a. Which is the odd one out?

A.



B.

One more than 34 is 35.

C.



5b. Which is the odd one out?

A.



B.



C.




3a. Esme has drawn a number track to match the ten frames.



Is she correct? Explain your answer.



3b. Ben has drawn a number track to match the ten frames.



Is he correct? Explain your answer.



6a. Stan has drawn a number track to show one more than 39.



Is he correct? Explain your answer.



6b. Emma has drawn a number track to show one less than 30.



Is she correct? Explain your answer.

