

Year 2 Math's Homework

Time to the Half Hour

Time to the Half Hour

1a. What time does the clock show?



Half past 2

Half past 5



VF

1b. What time does the clock show?



Half past 6

Half past 9



VF

2a. True or false? The clock shows half past 11.



VF

2b. True or false? The clock shows half past 4?



VF

3a. Draw a line to match each clock to the correct written time.



Half past 6



Half past 7



VF

3b. Draw a line to match each clock to the correct written time.



Half past 2



Half past 3



VF

4a. Draw the minute hand on the clock face to show the time, half past 5.



VF

4b. Draw the hour hand on the clock face to show the time, half past 8.



VF

Telling the Time to 5 Minutes


1. Draw a line to match the times to the number on the clock that the minute hand would be pointing at.

quarter past

half past

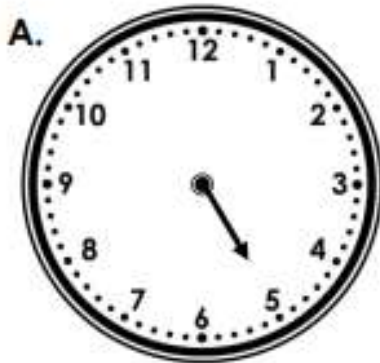
o'clock

quarter to

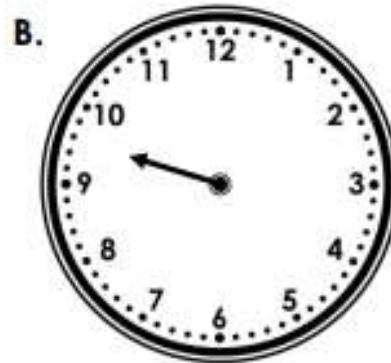


VF
HW/Ext

2. Draw the minute hand on the clocks to tell the correct time.



5 o'clock



Half past 9



VF
HW/Ext

3. It takes Shawaiz 5 minutes to complete each worksheet his teacher gives him. He has 3 worksheets to complete.



If I start working at 1 o'clock, I will be finished at quarter past 1.



Is Shawaiz correct?
Explain how you know.



RPS
HW/Ext

Time to the Half Hour

5a. What time does the clock show?



Half past three

Half past 4

Half past six



VF

Time to the Half Hour

5b. What time does the clock show?



Half past 2

Half past three

Half past 1



VF

6a. True or false? The clock shows half past ten.



VF

6b. True or false? The clock shows half past 7.



VF

7a. Draw a line to match the clocks to the correct written time.



Half past 4

Half past 5



Half past 8



VF

7b. Draw a line to match the clocks to the correct written time.



Half past six

Half past one




Half past twelve



VF

8a. Draw the hour hand and minute hand on the clock face to show the time half past 2.



VF

8b. Draw the hour hand and minute hand on the clock face to show the time half past 12.



VF