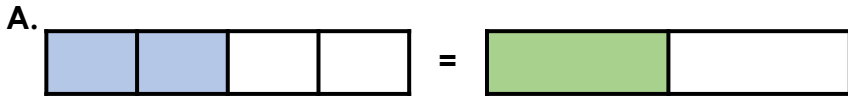
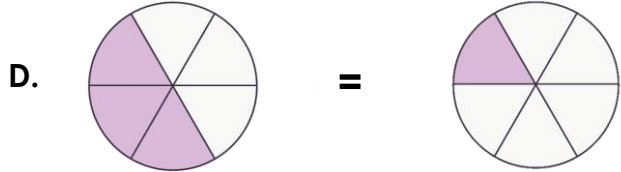
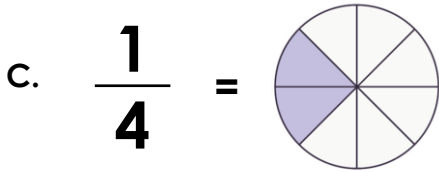


Equivalent Fractions 1

1. Circle all the equivalent fractions that are correct.

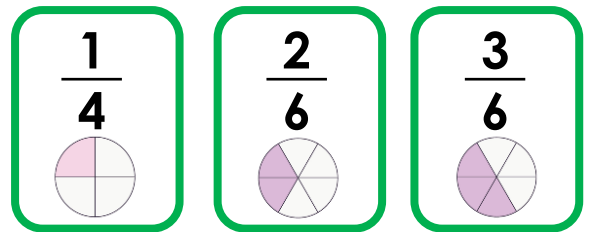
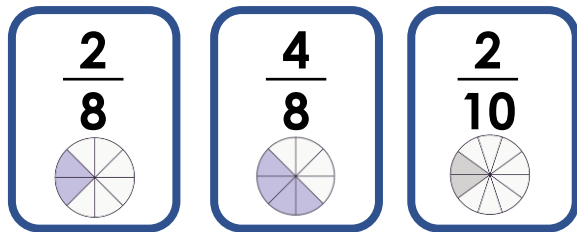
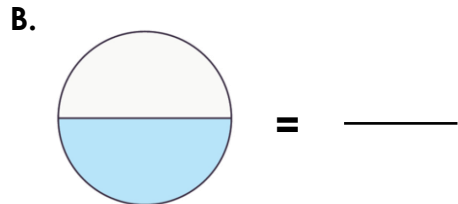
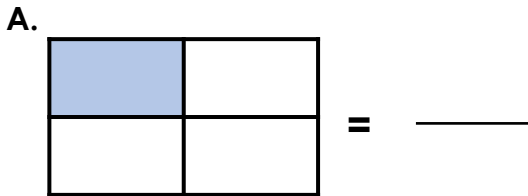


B. $\frac{1}{4} = \frac{1}{2}$



VF
HW/Ext

2. Match the fractions to their equivalents.

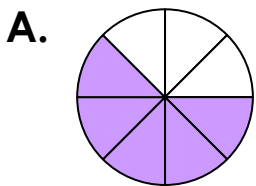


VF
HW/Ext

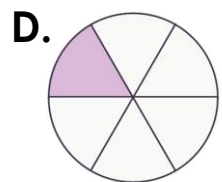
3. Zakib says,



All these fractions are equivalent to $\frac{1}{4}$.



B. $\frac{2}{8}$



Is he correct? Explain your answer.



RPS
HW/Ext